

COOKIE CIRCLES

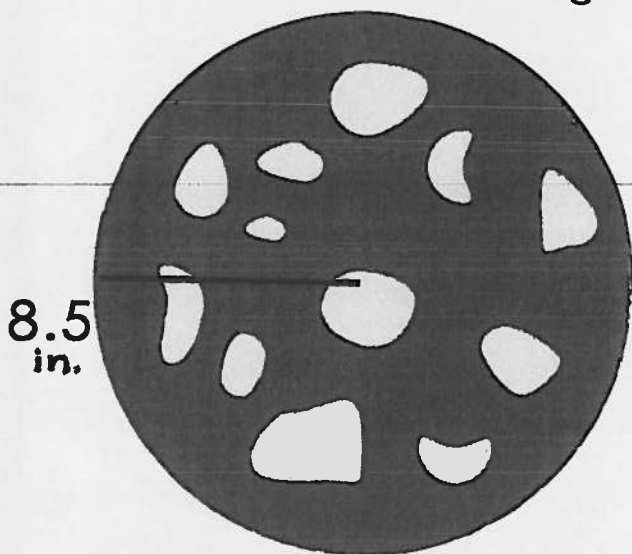
Area, Circumference, Diameters

Fill in the missing information about these cookies!

Formulas:

Diameter = (2)(radius) Circumference = (π)(diameter) Area = πr^2

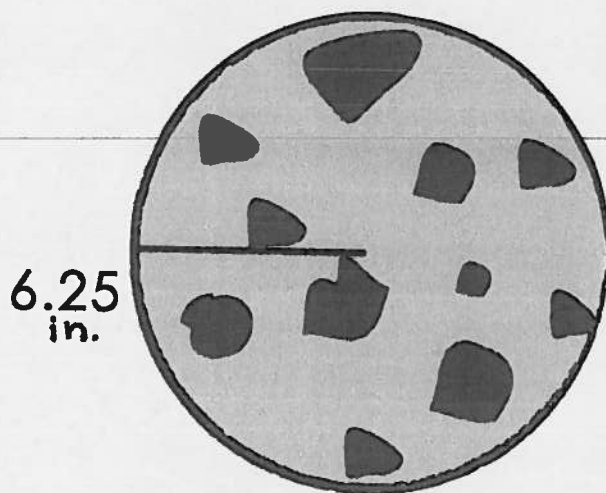
For this assignment please use $\pi = 3.14$



diameter: _____

circumference: _____


area: _____



diameter: _____

circumference: _____

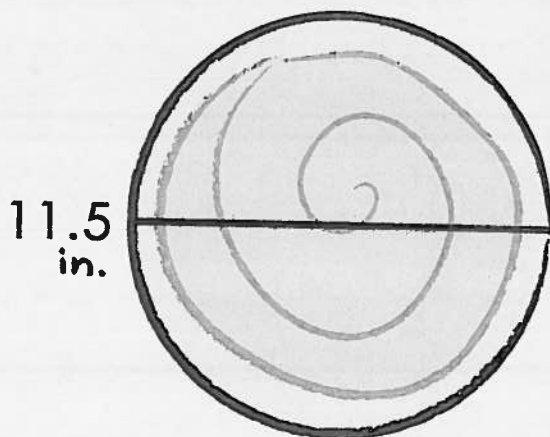
area: _____



radius: _____

circumference: _____

area: _____



radius: _____

circumference: _____

area: _____

PIZZA CIRCLES

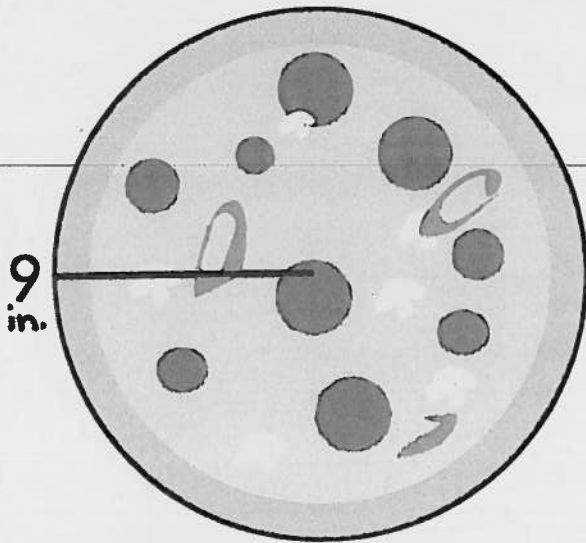
Area, Circumference, Diameters

Fill in the missing information about these pizzas!

Formulas:

Diameter = 2(radius) Circumference = π (diameter) Area = πr^2

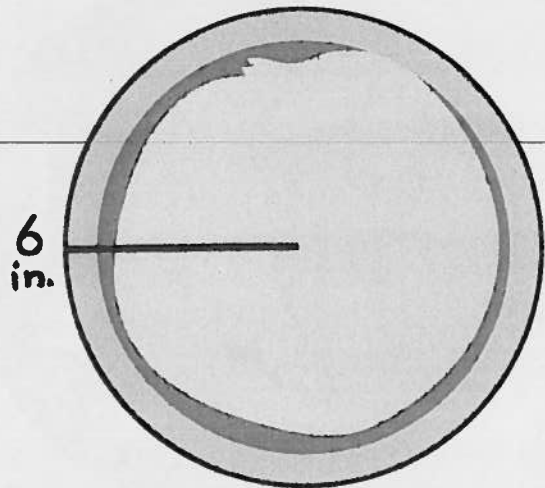
For this assignment please use $\pi = 3.14$



diameter: _____

circumference: _____

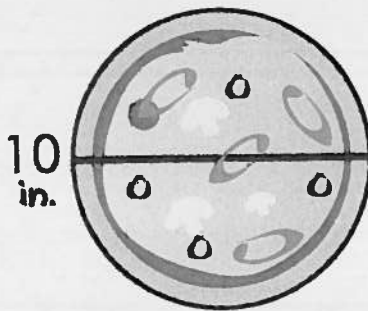
area: _____



diameter: _____

circumference: _____

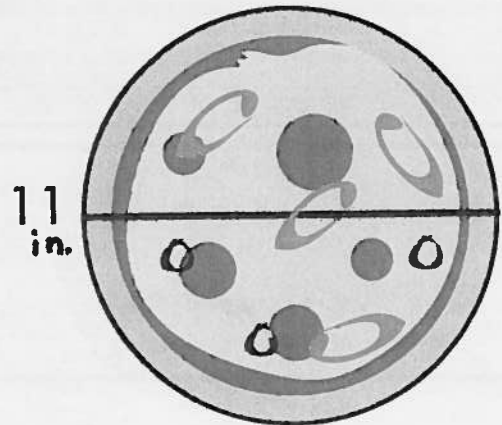
area: _____



radius: _____

circumference: _____

area: _____



radius: _____

circumference: _____

area: _____